






| BHAVAN'S VIDYA MANDIR, EROOR | |
|------------------------------|---|
| VACATION ASSIGNMENT 2022-23 | |
| STD II | |
| SUBJECT | ASSIGNMENT THEME - SPORTS |
| ENGLISH | Create a puzzle(crossword / word search) with words related to sports and games. |
| HINDI | किन्हीं पाँच खिलाड़ी तथा उनके खेल का नाम चित्र सहित प्रस्तुत कीजिए |
| MALAYALAM | കുട്ടികളുടെ ശാരീരികവും മാനസികവുമായ വളർച്ചയ്ക്ക് ഉതകുന്ന ഏതെങ്കിലും മൂന്ന് കളികളുടെ ചിത്രം ഒട്ടിച്ചു പേരെഴുതുക. |
| SANSKRIT | Write the names of any four animals or birds in Sanskrit. Stick/draw pictures of the same. |
| EVSC | Write 3 sentences on any 2 indoor and outdoor games. |
| MATHS | <p>Jerry and his friends are at the sports shop getting ready for some summer fun!. They are purchasing the following items.</p> <div style="display: flex; justify-content: space-around; align-items: flex-start;"> <div style="text-align: center;">  <p>Cricket ball - ₹ 80</p> </div> <div style="text-align: center;">  <p>Flying disc- ₹ 55</p> </div> <div style="text-align: center;">  <p>Snake and ladder- ₹ 85</p> </div> </div> <div style="display: flex; justify-content: space-around; align-items: flex-start; margin-top: 20px;"> <div style="text-align: center;">  <p>Skipping rope - ₹ 65</p> </div> <div style="text-align: center;">  <p>Shuttlecock - ₹ 35</p> </div> </div> <p>Observe the items carefully and answer the questions given below.</p> <ol style="list-style-type: none"> Which item is the costliest? Arrange all the items in the ascending order of their cost. If Jerry purchased one shuttlecock and a flying disc, how much money should he pay to the shopkeeper? Jerry's friend has 90 rupees with him. He purchased a skipping rope. How much money does he get back as balance? |
| | |
| | |